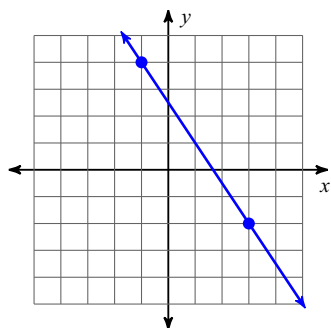


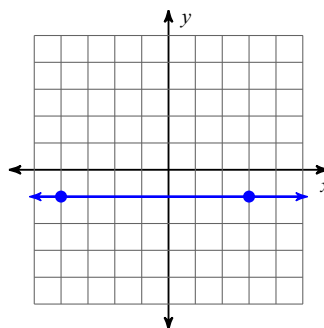
Slope Intercept Form - Additional Practice

Find the slope of each line.

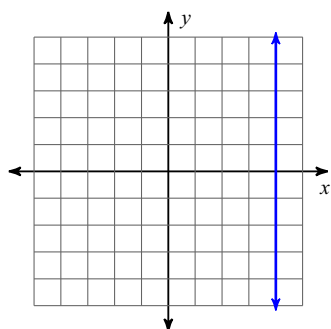
1)



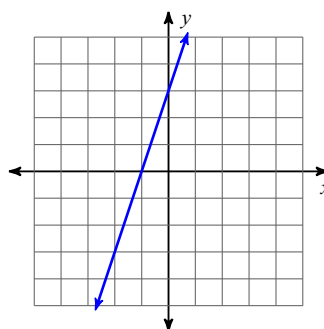
2)



3)



4)



Find the slope of the line through each pair of points.

5) $(-12, -20), (13, 5)$

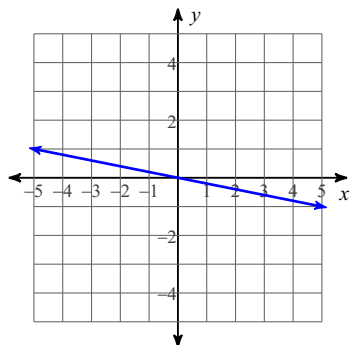
6) $(-13, -19), (7, -7)$

7) $(-16, 18), (16, 18)$

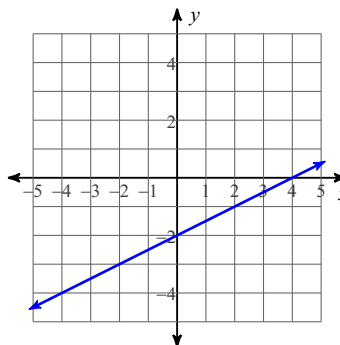
8) $(-9, 12), (-4, -14)$

Write the slope-intercept form of the equation of each line.

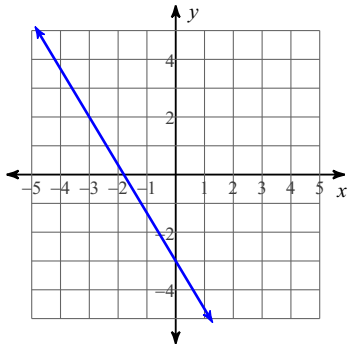
9)



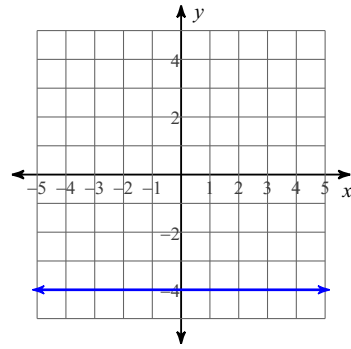
10)



11)

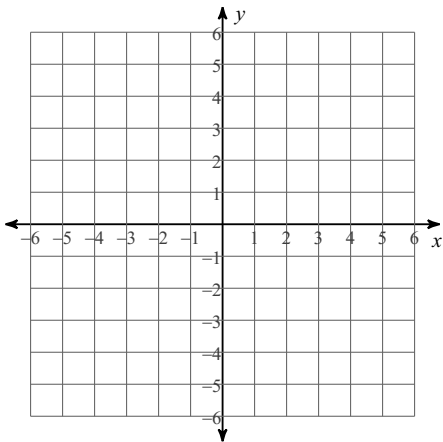


12)

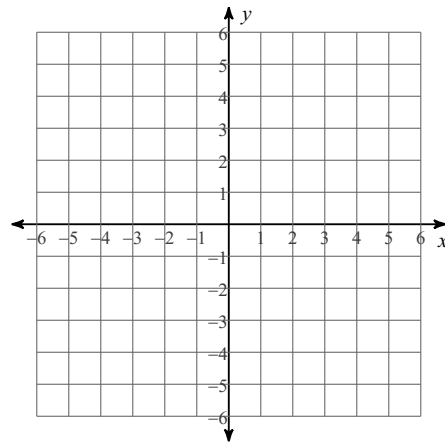


Sketch the graph of each line.

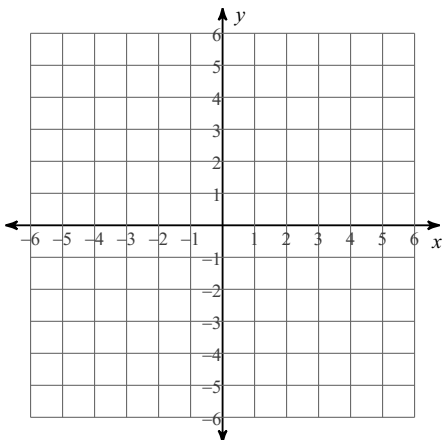
13) $y = 4x - 4$



14) $y = x$



15) $y = -\frac{1}{3}x - 2$



16) $y = -\frac{2}{3}x + 1$

