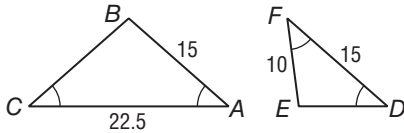


7 Chapter 7 Test, Form 2C

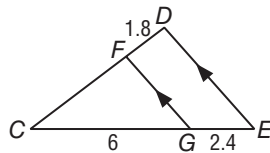
- Of the 300 television sets sold at an electronics store last month, 90 were flat-screen TVs. What is the ratio of flat-screen TVs to other TVs sold last month?
- Determine whether $\triangle ABC \sim \triangle DEF$. Justify your answer.



1. _____

2. _____

- When a 5-foot vertical pole casts a 3-foot 4-inch shadow, an oak tree casts a 20-foot shadow. Find the height of the tree.
- Quadrilateral $ABCD \sim$ quadrilateral $WXYZ$, $AB = 15$, $BC = 27$, $CD = 27$, and the scale factor of $WXYZ$ to $ABCD$ is $\frac{2}{3}$. Find XY .
- The blueprint for a swimming pool is 8 inches by $2\frac{1}{2}$ inches. The actual pool is 136 feet long. Find the width of the pool.
- Find CD .



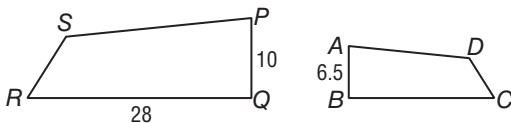
3. _____

4. _____

5. _____

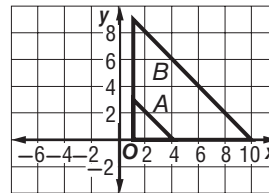
6. _____

- If quadrilateral $ABCD \sim$ quadrilateral $PQRS$, find BC .



7. _____

- Is the dilation a similarity transformation? Verify your answer.



8. _____

- $\triangle ABC \sim \triangle XYZ$, $AB = 12$, $AC = 16$, $BC = 20$, and $XZ = 24$. Find the perimeter of $\triangle XYZ$.

9. _____

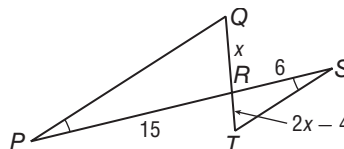
For Questions 10 and 11, use the figure.

- Identify the similar triangles.

10. _____

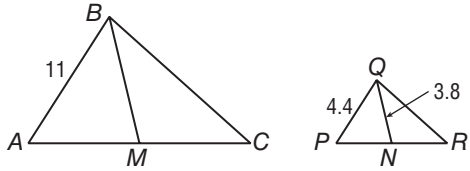
- Find the value of x .

11. _____



7 Chapter 7 Test, Form 2C (continued)

12. If $\triangle ABC \sim \triangle PQR$ and \overline{BM} and \overline{QN} are medians, find BM .

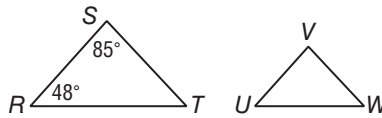


12. _____

13. The ratio of the measures of the three sides of a triangle is 3:4:6. If the perimeter is 91, find the length of the longest side.

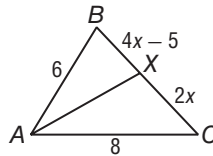
13. _____

14. If $\triangle RST \sim \triangle UVW$, find $m\angle W$.



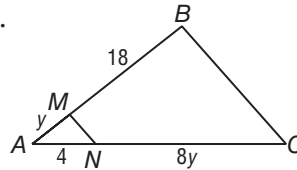
14. _____

15. In $\triangle ABC$, \overline{AX} bisects $\angle BAC$. Find the value of x .



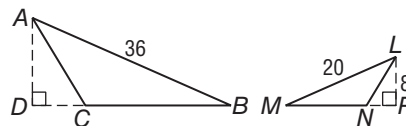
15. _____

16. Find the value of y so that $\overline{MN} \parallel \overline{BC}$.



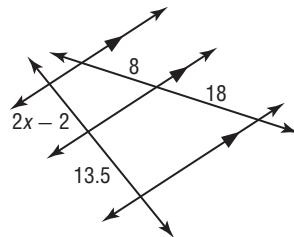
16. _____

17. $\triangle ABC \sim \triangle LMN$, and \overline{AD} and \overline{LP} are altitudes. Find AD .



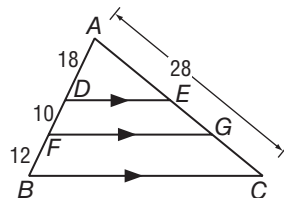
17. _____

18. Find the value of x .



18. _____

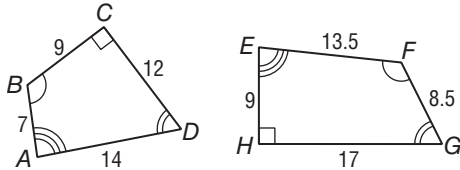
Bonus Find EG .



B: _____

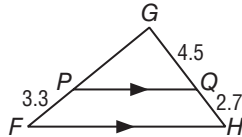
7 Chapter 7 Test, Form 2D

- Of the 112 students in the marching band, 35 were in the drum section. What is the ratio of drummers to other musicians in the band?
- Determine whether quadrilateral $ABCD \sim$ quadrilateral $EFGH$. Justify your answer.



- When a 9-foot tall garden shed cast a 5-foot 3-inch shadow, a house cast a 28-foot shadow. Find the height of the house.
- $\triangle ABC \sim \triangle FGH$, $AB = 24$, $AC = 16$, $GH = 9$, and $FH = 12$. Find the scale factor of $\triangle ABC$ to $\triangle FGH$.
- The model of a suspension bridge is 18 inches long and 2 inches tall. If the length of the actual bridge is 1650 feet, find its height.

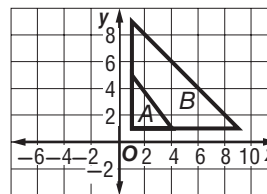
6. Find GP .



7. If $\triangle JKL \sim \triangle PQR$, find the value of x .



8. Is the dilation a similarity transformation? Verify your answer.

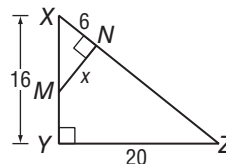


9. $\triangle ABC \sim \triangle PQR$, $AB = 18$, $BC = 20$, $AC = 22$, and $QR = 25$. Find the perimeter of $\triangle PQR$.

For Questions 10 and 11, use the figure.

10. Identify the similar triangles.

11. Find MN .



1. _____

2. _____

3. _____

4. _____

5. _____

6. _____

7. _____

8. _____

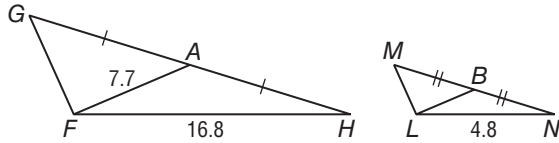
9. _____

10. _____

11. _____

7 Chapter 7 Test, Form 2D (continued)

12. If $\triangle FGH \sim \triangle LMN$ and \overline{AF} and \overline{BL} are medians, find BL .

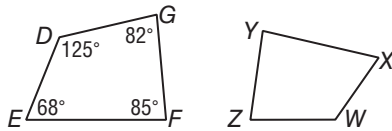


12. _____

13. The ratio of the measures of the three angles of a triangle is 3:4:8. Find the measure of the largest angle.

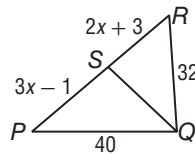
13. _____

14. If quadrilateral $DEFG \sim$ quadrilateral $WXYZ$, find $m\angle Y$.



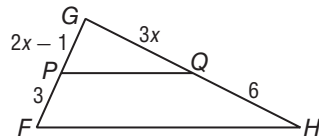
14. _____

15. In $\triangle PQR$, \overline{QS} bisects $\angle PQR$. Find the value of x .



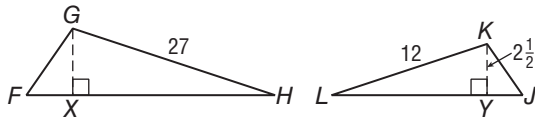
15. _____

16. Find the value of x so that $\overline{PQ} \parallel \overline{FH}$.



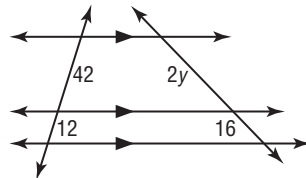
16. _____

17. If $\triangle FGH \sim \triangle JKL$, find GX .



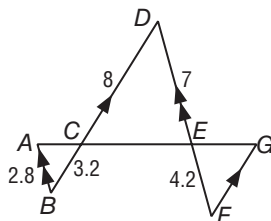
17. _____

18. Find the value of y .



18. _____

Bonus Find FG .



B: _____

Chapter 7 Assessment Answer Key

Form 2C

Page 61

Page 62

1. 3:7

2. Yes; AA Similarity

3. 30 ft

4. 18

5. 42.5 ft

6. 6.3

7. 18.2

~~Yes~~ **No** Yes. The right angles are congruent. The legs are proportional. $\frac{4}{10} \neq \frac{3}{9}$ By SAS similarity, the triangles are similar.

8. _____

9. 72

10. $\triangle PQR \sim \triangle STR$

11. $2\frac{1}{2}$

12. 9.5

13. 42

14. 47

15. 2

16. 3

17. 14.4

18. 4

B: 7

Chapter 7 Assessment Answer Key

Form 2D
Page 63

Page 64

1. 5:11

No; the corresponding sides are not proportional.
2.

3. 48 ft

4. $\frac{4}{3}$

5. $188\frac{1}{3}$ ft

6. 5.5

7. 15

No. The legs of the right triangles are not proportional.
8.

9. 75

10. $\triangle XYZ \sim \triangle XNM$

11. 7.5

12. 2.2

13. 96

14. 85

15. 9.5

16. 2

17. $5\frac{5}{8}$

18. 28

B: 4.8

Copyright © Glencoe/McGraw-Hill, a division of The McGraw-Hill Companies, Inc.