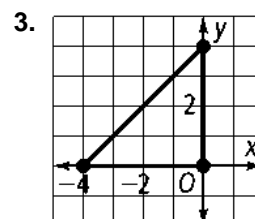
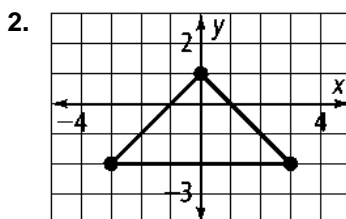
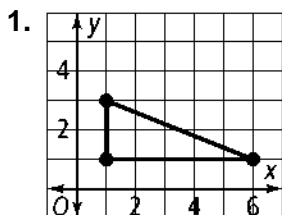


5-3 Practice

Form G

Bisectors in Triangles

Coordinate Geometry Find the circumcenter of each triangle.



Coordinate Geometry Find the circumcenter of $\triangle ABC$.

4. $A(1, 3)$
 $B(4, 3)$
 $C(4, 2)$

5. $A(2, -3)$
 $B(-4, -3)$
 $C(-4, -7)$

6. $A(-5, -2)$
 $B(1, -2)$
 $C(1, 6)$

7. $A(5, 6)$
 $B(0, 6)$
 $C(0, -3)$

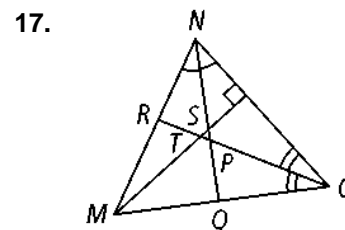
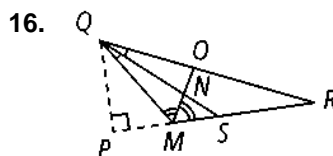
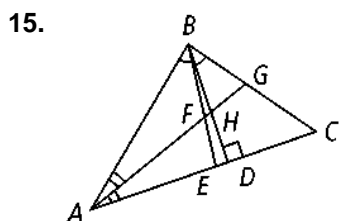
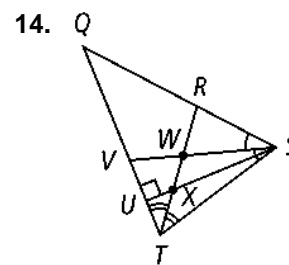
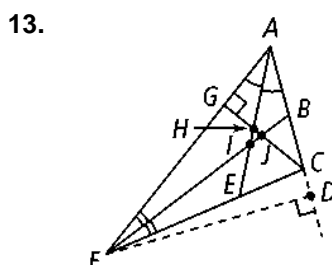
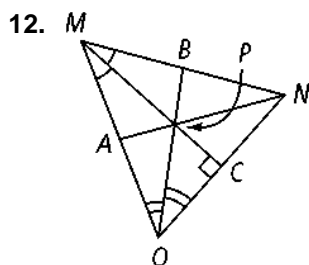
8. $A(1, 3)$
 $B(5, 3)$
 $C(5, 2)$

9. $A(2, -2)$
 $B(-4, -2)$
 $C(-4, -7)$

10. $A(-5, -3)$
 $B(1, -3)$
 $C(1, 6)$

11. $A(5, 2)$
 $B(-1, 2)$
 $C(-1, -3)$

Name the point of concurrency of the angle bisectors.



5-3

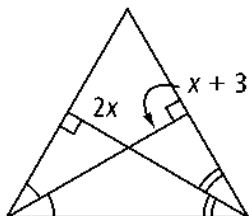
Practice (continued)

Form G

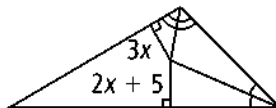
Bisectors in Triangles

Find the value of x .

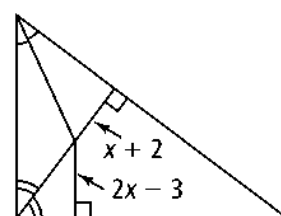
18.



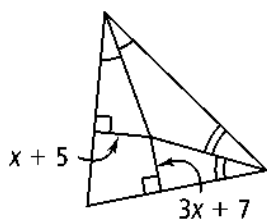
19.



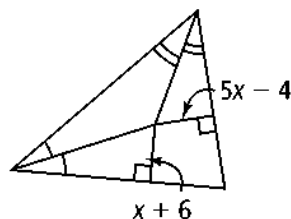
20.



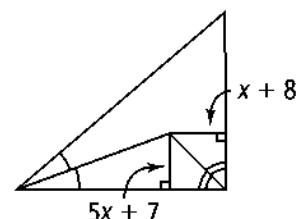
21.



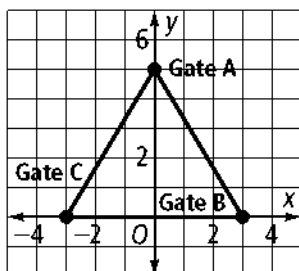
22.



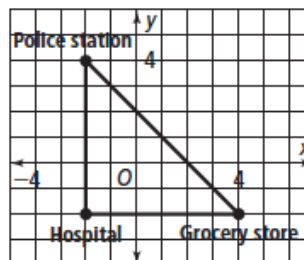
23.



24. Where should the farmer place the hay bale so that it is equidistant from the three gates?

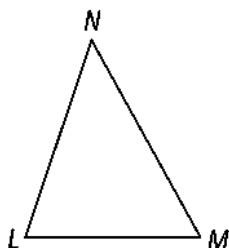


25. Where should the fire station be placed so that it is equidistant from the grocery store, the hospital, and the police station?



26. **Construction** Construct three perpendicular bisectors for $\triangle MN$. Then use the point of concurrency to construct the circumscribed circle.

00



27. **Construction** Construct two angle bisectors for $\triangle ABC$. Then use the point of concurrency to construct the inscribed circle.

